

## Functional Skills Maths Assessment Entry 2

Learner Name: \_\_\_\_\_

Learner Signature: \_\_\_\_\_

Centre: \_\_\_\_\_

Assessment Date: \_\_\_\_\_

Assessment Duration: \_\_\_\_\_

Assessment Number: SAMPLE

Calculators are allowed



Task 1

Month	Minutes used
January	80
February	34
March	61
April	42

Put the minutes used in order from lowest to highest. (2 marks)

--	--	--	--

Task 2

2a. How many minutes did you use in February **and** March? (3 marks)

--

2b. In May you use half the minutes you used in April. How many minutes did you use? Show your working. (3 marks)

--



### Task 3

3a. You get 5 free texts every month. How many free texts do you get every year? Show your working. (3 marks)



3b. Extra texts cost 5p each.  
How much will it cost to send 8 extra texts? (2 marks)

### Task 4

You top up your phone with £7.  
How much change will you get from £10?  
Show your working. (2 marks)



Task 5

Circle the third Friday of the month. You buy a top up on that date.  
(1 mark)

## August

Monday	Tuesday	Wednesday	Thursday	Friday	Saturday	Sunday
					1	2
3	4	5	6	7	8	9
10	11	12	13	14	15	16
17	18	19	20	21	22	23
24	25	26	27	28	29	30
31						

Task 6

After the third Friday, you buy a top up every five days. Put a tick on the calendar to show when you buy a top up. (2 marks)

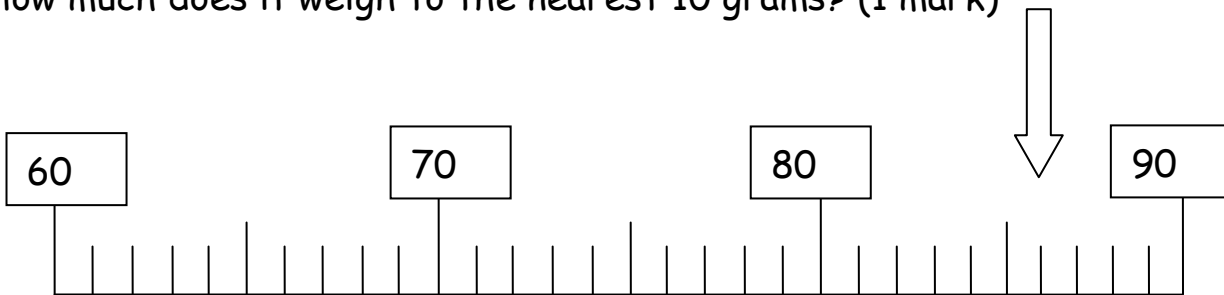


Task 7

Your phone has broken.

You send it away.

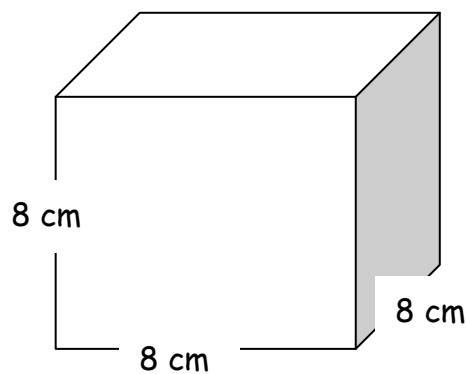
How much does it weigh to the nearest 10 grams? (1 mark)



Task 8

8a. You pack it in a box.

What shape is the box? \_\_\_\_\_ (1 mark)



8b. Give a reason why you think it is that shape? (1 mark)




Task 9

The box weighs 25 grams.

What is the weight of the phone **and** the box? (Use your answer to Task 7)  
Show your working. (3 marks)

Task 10

You buy some stamps.



Weight of parcel	Number of stamps
10 grams	1
30 grams	3
60 grams	6
120 grams	12

How many stamps will you need for the box **and** the phone? Explain why you will need this number of stamps. (2 marks)



You keep a record of how many £10 top ups you use.

Month	Number of Top Ups	Cost
January	2	£20
February	4	
March	1	
April	5	
May	6	
June	3	

Complete the Cost column to show how much you spend. (5 marks)

Finish the bar chart to show your monthly costs. (5 marks)

